

# Telling time to 5 minutes

1 Match the activities with the correct times.



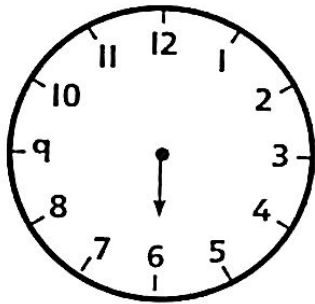
ten to 7

twenty-five past 8


twenty past 3

ten past 5


2 Draw the minute hand for each time.




five past 6



twenty-five past 10





ten to 4






twenty-five to 11

3




a) Circle the bus that leaves at ten past 12.



b) Circle the bus that leaves at ten to 12.



c) What time does bus C leave?




---

4

The time is ten minutes to 8.


Which number will the minute hand point to?

How do you know?

5



It is thirty-five minutes past 7.



You are both right!



It is twenty-five to 8.



Explain how they can both be right.

---

---

---

I wonder if I can say any other times in two ways.



**Reflect**

If the time is twenty minutes past, what number will the minute hand point to?

How did you find the answer?

- 
- 
- 

---

---

---